



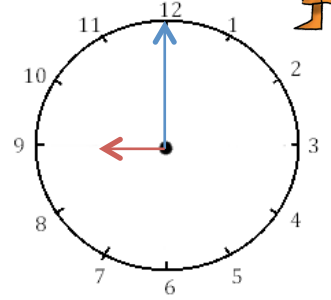
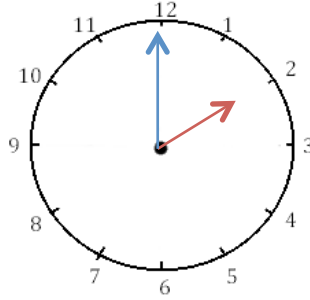
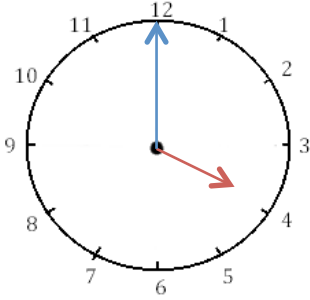
Mesures

Fiche 1

Les heures

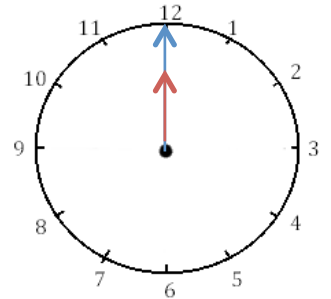
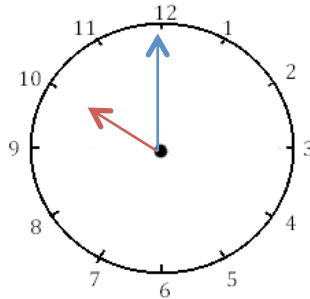
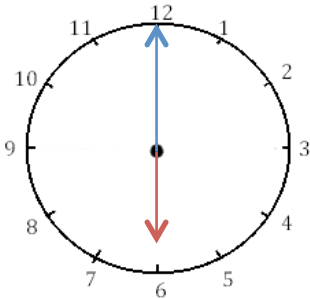


1 J'écris les heures indiquées sur ces horloges. Nous sommes le matin.




Il est ___ h et ___ min. Il est ___ h et ___ min. Il est _____.

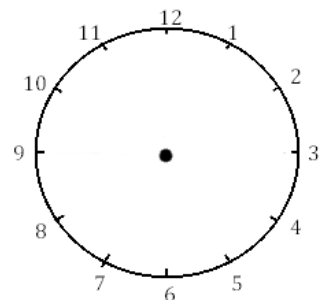
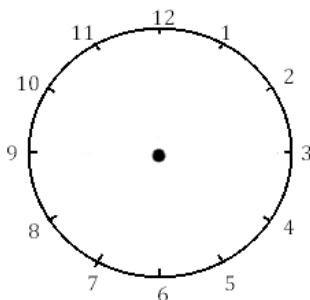
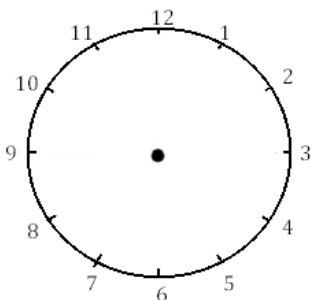
2 J'écris les heures indiquées sur ces horloges. Nous sommes le matin.



Il est ___ h et ___ min. Il est ___ h et ___ min. Il est _____.



3 Je place les aiguilles selon les heures indiquées. (heures en rouge, minutes en bleu)



Il est 3 h 00 min. Il est 11 h 00 min. Il est 5 h 00 min.

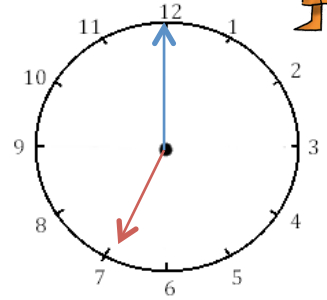
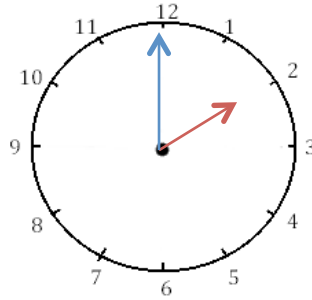
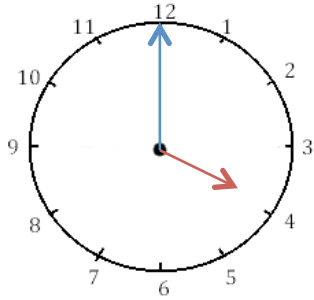


Mesures

Fiche 2

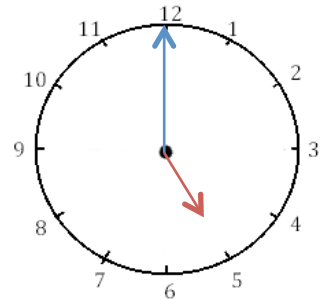
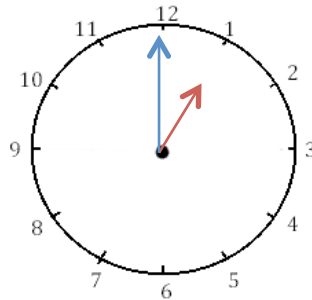
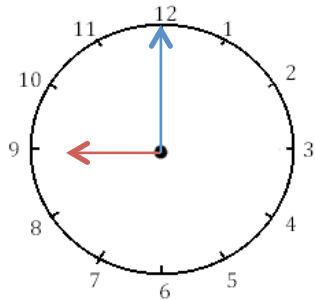
Les heures

1 J'écris les heures indiquées sur ces horloges. Nous sommes l'après midi.



Il est ___ h et ___ min. Il est ___ h et ___ min. Il est _____.

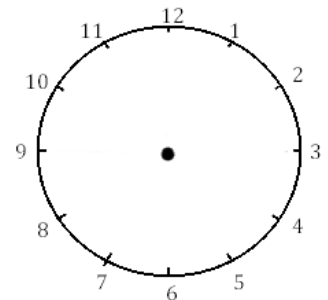
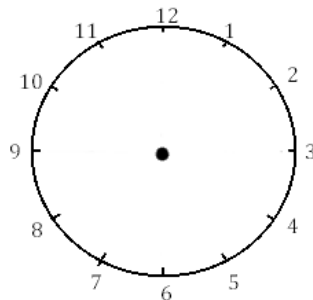
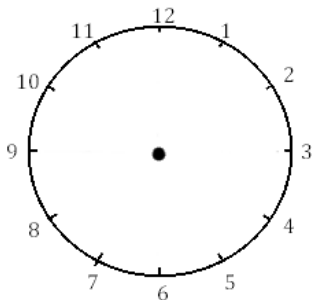
2 J'écris les heures indiquées sur ces horloges. Nous sommes l'après-midi.



Il est ___ h et ___ min. Il est ___ h et ___ min. Il est _____.



3 Je place les aiguilles selon les heures indiquées. (heures en rouge, minutes en bleu)



Il est 13 h 00 min.

Il est 20 h 00 min.

Il est 23 h 00

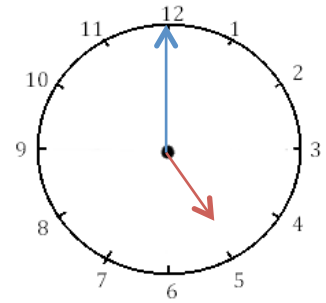
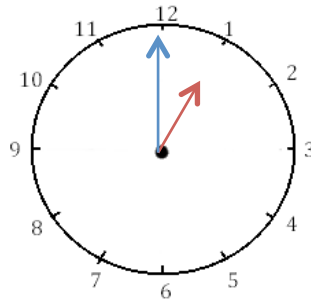
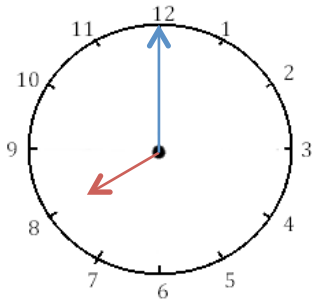


Mesures

Fiche 3

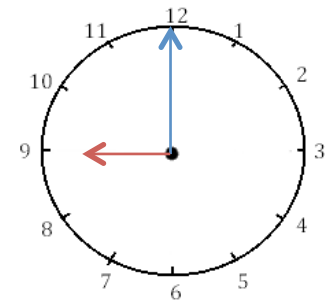
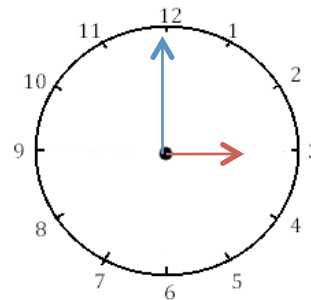
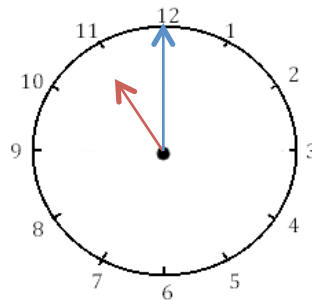
Les heures

1 J'écris les heures indiquées sur ces horloges. Nous sommes l'après-midi.



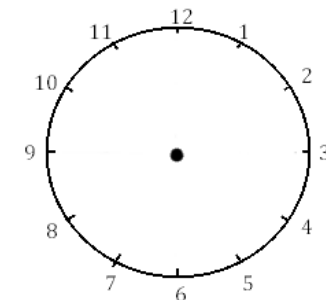
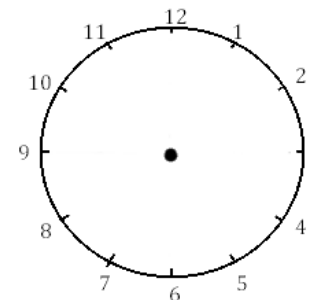
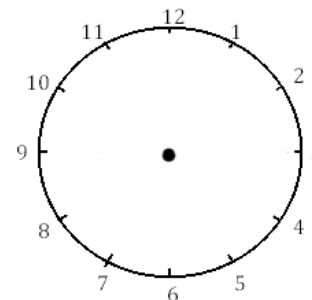
Il est ___ h et ___ min. Il est ___ h et ___ min. Il est ___ h et ___ min.

2 J'écris les heures indiquées sur ces horloges. Nous sommes le matin.



Il est ___ h et ___ min. Il est ___ h et ___ min. Il est ___ h et ___ min.


3 Je place les aiguilles selon les heures indiquées. (heures en rouge, minutes en bleu)



Il est 23 h 00 min.

Il est 14 h 00 min.

Il est 18 h 00



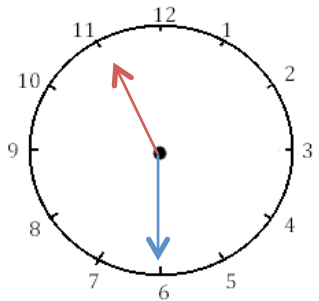
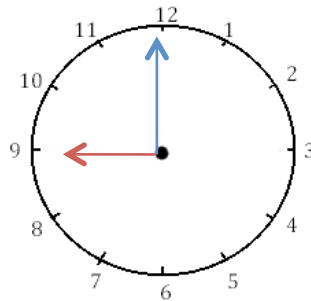
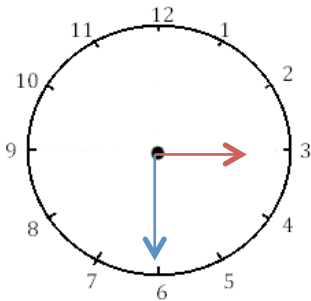



Mesures

Fiche 4

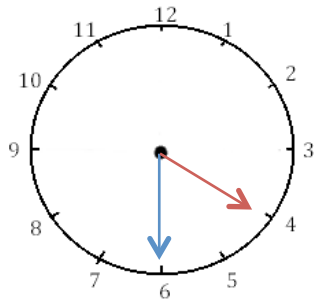
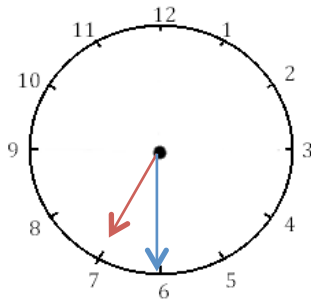
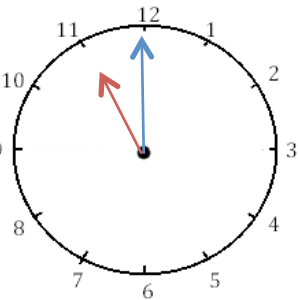
Les heures

1 J'écris les heures indiquées sur ces horloges. Nous sommes le matin.




Il est ___ h et ___ min. Il est ___ h et ___ min. Il est ___ h et ___ min.

2 J'écris les heures indiquées sur ces horloges. Nous sommes l'après-midi.

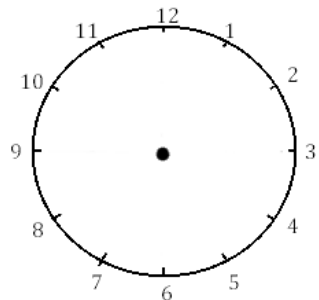
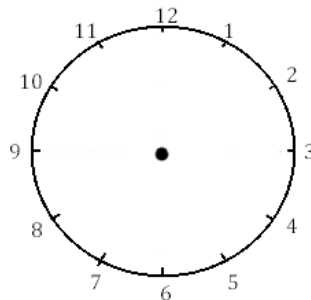
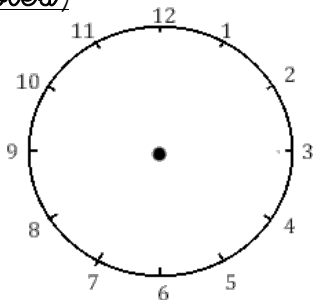


Il est ___ h et ___ min. Il est ___ h et ___ min. Il est ___ h et ___ min.

3 Je place les aiguilles selon les heures indiquées. (heures en rouge, minutes



bleu)



Il est 12 h 30 min.

Il est 9 h 00 min.

Il est 15 h 30 min.

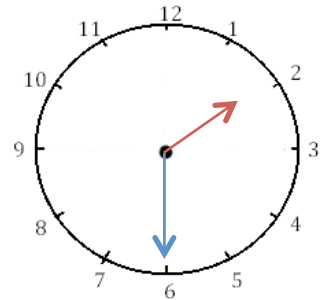
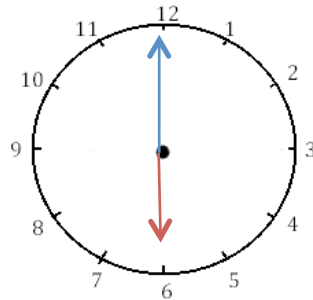
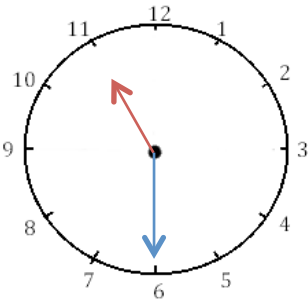


Mesures

Fiche 5

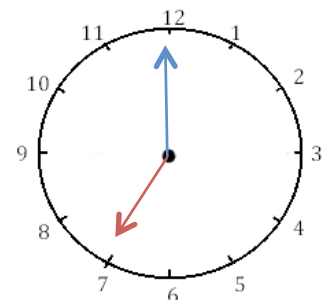
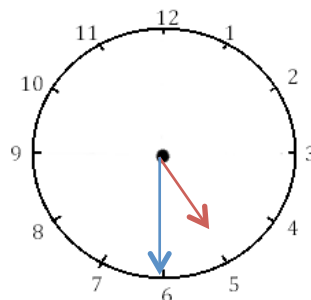
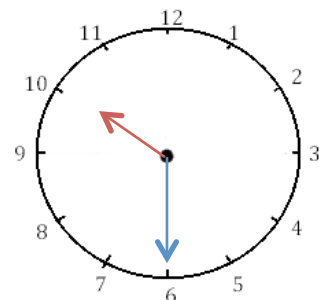
Les heures

1 J'écris les heures indiquées sur ces horloges. Nous sommes l'après-midi.



Il est ___ h et ___ min. Il est ___ h et ___ min. Il est ___ h et ___ min.

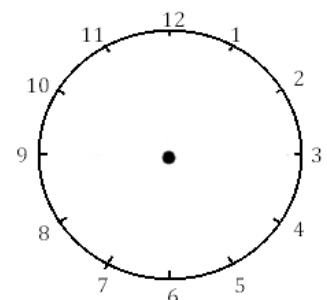
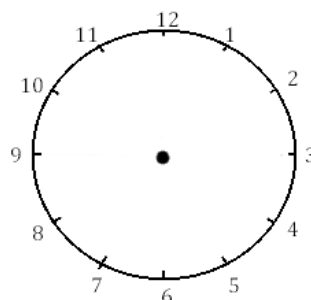
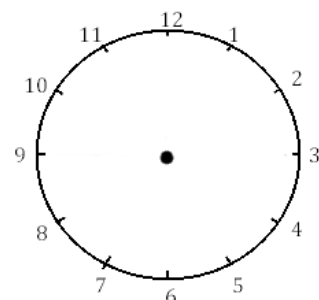
2 J'écris les heures indiquées sur ces horloges. Nous sommes le matin.



Il est ___ h et ___ min. Il est ___ h et ___ min. Il est ___ h et ___ min.




3 Je place les aiguilles selon les heures indiquées. (heures en rouge, minutes en bleu)



Il est 21 h 30 min.

Il est 13 h 00 min.

Il est 18 h 30 min.



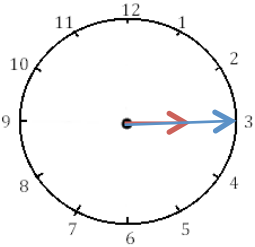


Mesures

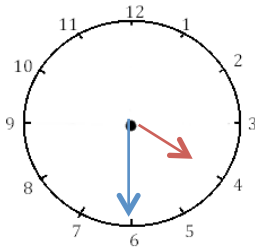
Fiche 6

Les heures

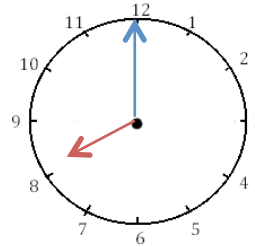
1 J'écris les heures indiquées sur ces horloges. Nous sommes le matin.



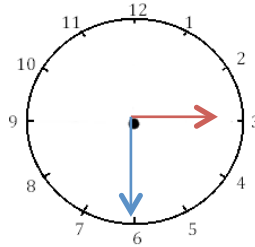
Il est _____.



Il est _____.

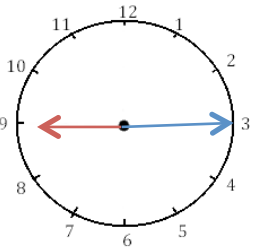


Il est _____.

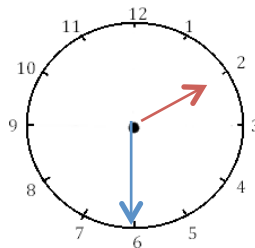


Il est _____.

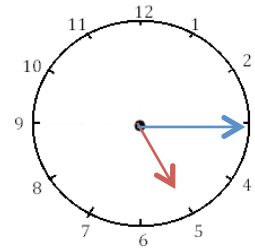
2 J'écris les heures indiquées sur ces horloges. Nous sommes l'après-midi.



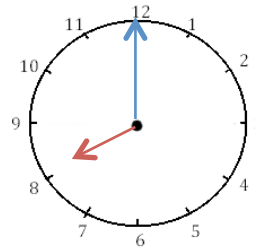
Il est _____.



Il est _____.



Il est _____.

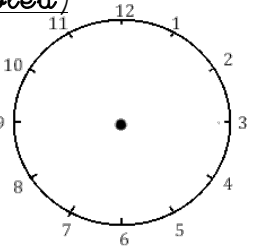


Il est _____.

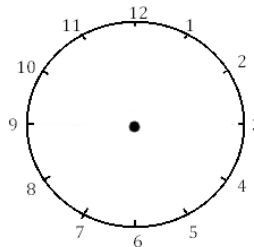


3 Je place les aiguilles selon les heures indiquées. (heures en rouge, minutes en

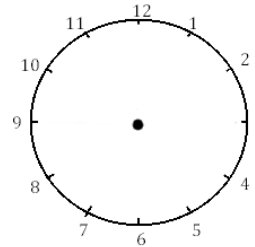
bleu)



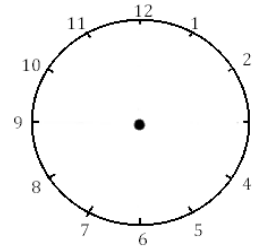
Il est 2 h 00 min.



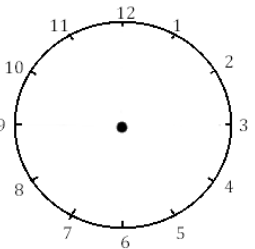
Il est 12 h 30 min.



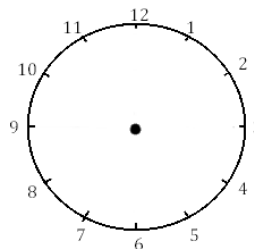
Il est 5 h 15 min.



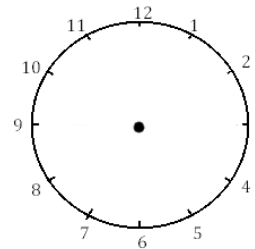
Il est 6 h et demie.



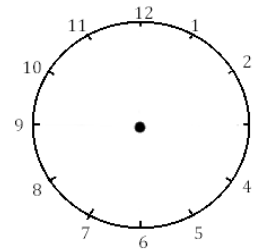
Il est 3 h et quart.



Il est 11 h 00 min.



Il est 1 h 30 min.



Il est 21 h 15 min.






Mesures

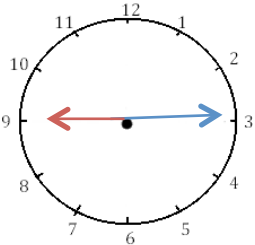
Fiche 7

Les heures



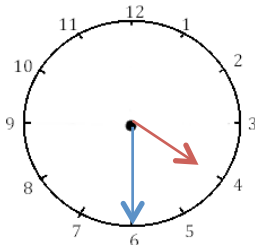
1

J'écris les heures du matin et de l'après-midi.



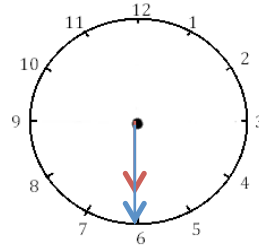
Il est ___ h ___ min.

Il est ___ h ___ min.



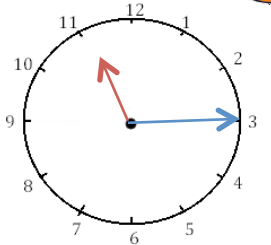
Il est ___ h ___ min.

Il est ___ h ___ min.



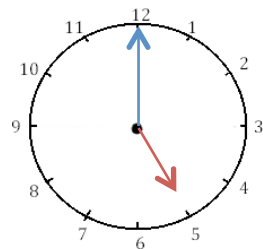
Il est ___ h ___ min.

Il est ___ h ___ min.



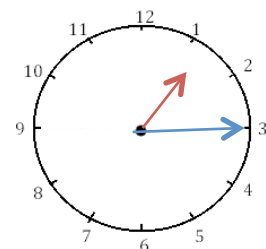
Il est ___ h ___ min.

Il est ___ h ___ min.



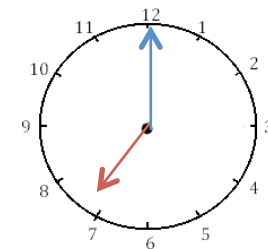
Il est ___ h ___ min.

Il est ___ h ___ min.



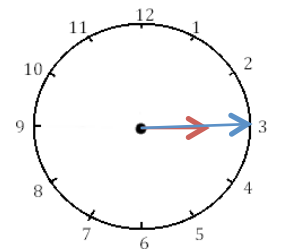
Il est ___ h ___ min.

Il est ___ h ___ min.




Il est ___ h ___ min.

Il est ___ h ___ min.



Il est ___ h ___ min.

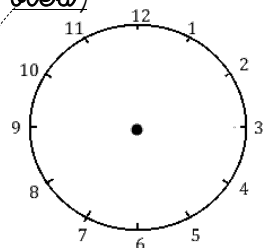
Il est ___ h ___ min.



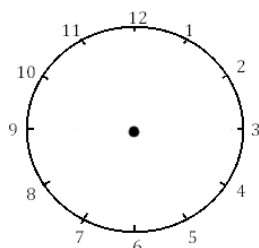
2

Je place les aiguilles selon les heures indiquées. (heures en rouge, minutes en

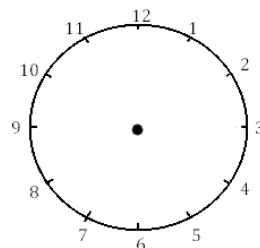
bleu)



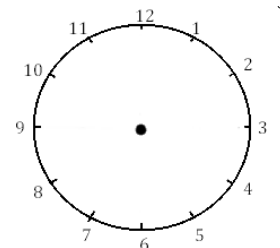
Il est midi.



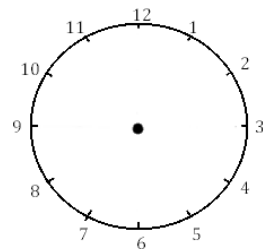
Il est 1 h et quart.



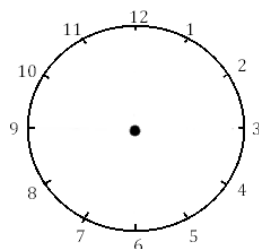
Il est 22 heures.



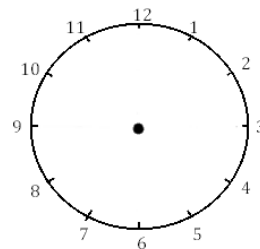
Il est 8 h et demie.



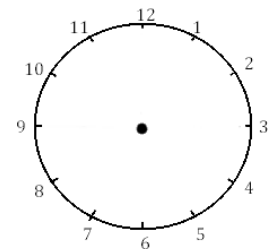
Il est 16 h et quart.



Il est 11 h et demie.



Il est minuit.



Il est 9 h et quart.



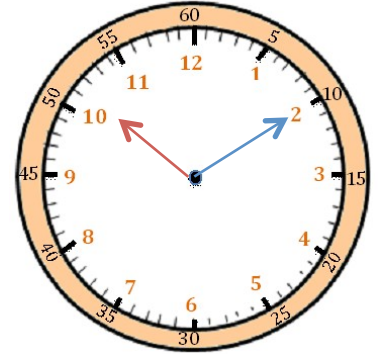
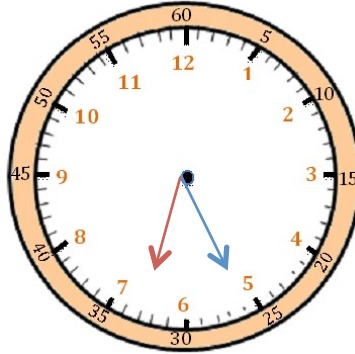
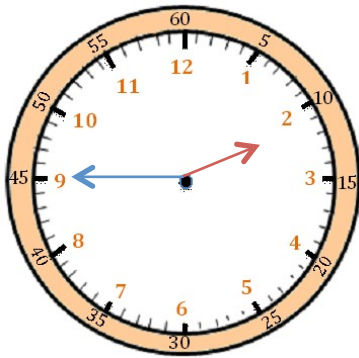
Mesures

Fiche 8

Les heures

1

J'écris les heures indiquées sur ces horloges. Nous sommes le matin.



Il est ___ h et ___ min.

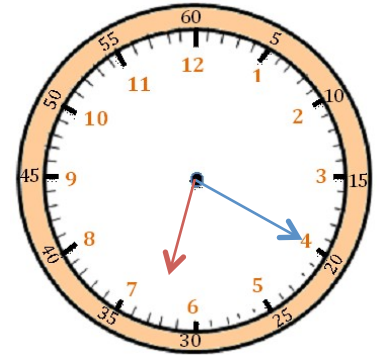
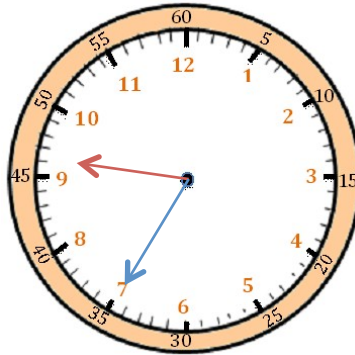
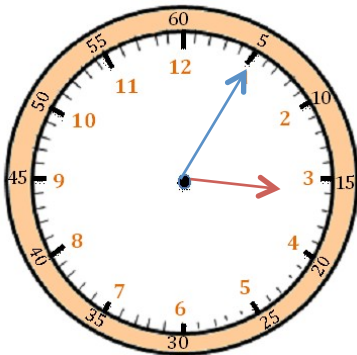
Il est ___ h et ___ min.

Il est ___ h et ___ min.



2

J'écris les heures indiquées sur ces horloges. Nous sommes l'après-midi.



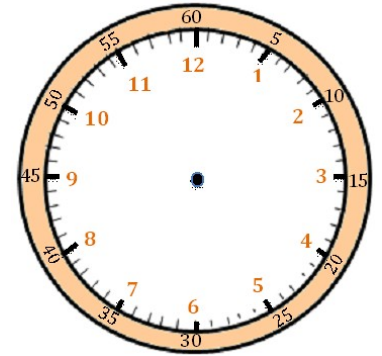
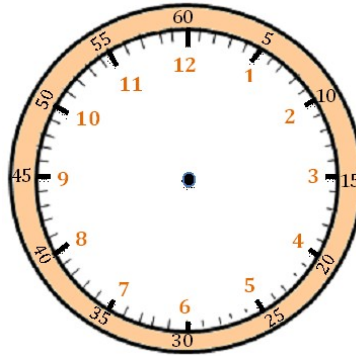
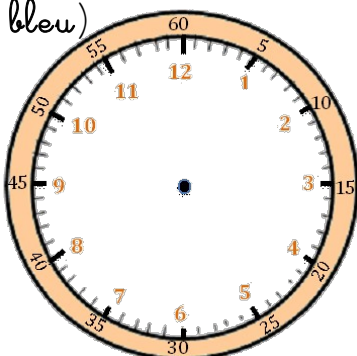
Il est ___ h et ___ min.

Il est ___ h et ___ min.

Il est ___ h et ___ min.

3

Je place les aiguilles selon les heures indiquées. (heures en rouge, minutes en bleu)



Il est 2 h 05 min.

Il est 8 h 20 min.

Il est 11 h 10 min.



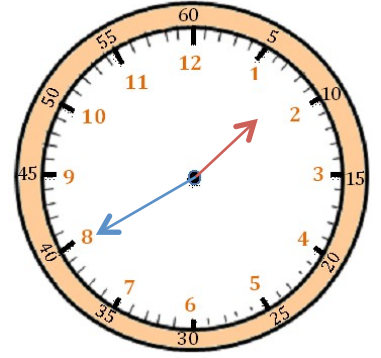
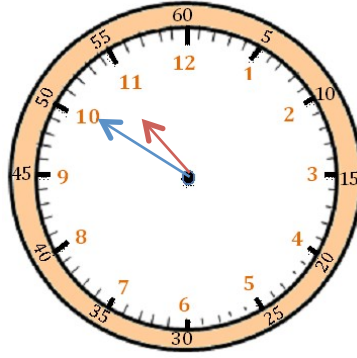
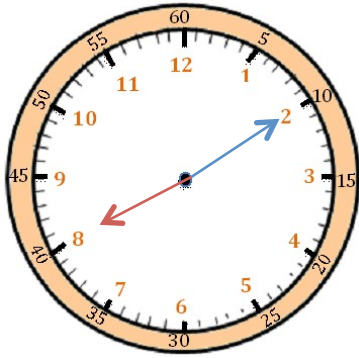
Mesures

Fiche 9

Les heures

1

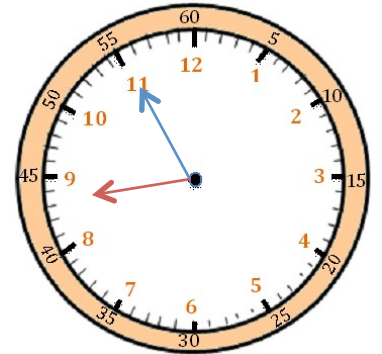
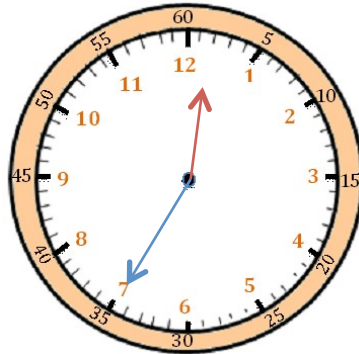
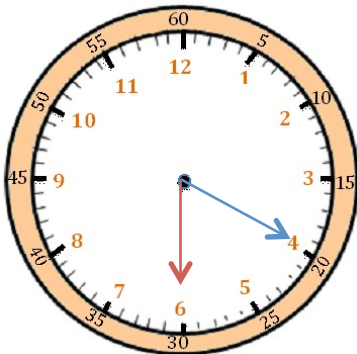
J'écris les heures indiquées sur ces horloges. Nous sommes l'après-midi.



Il est ___ h et ___ min. Il est ___ h et ___ min. Il est ___ h et ___ min.

2

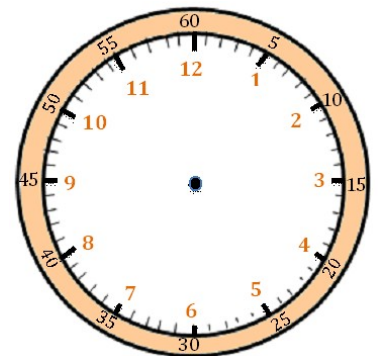
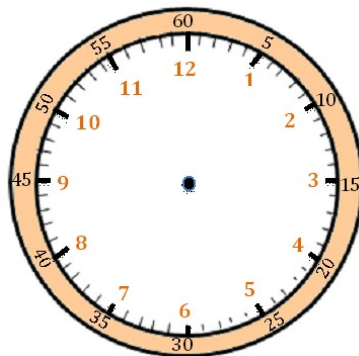
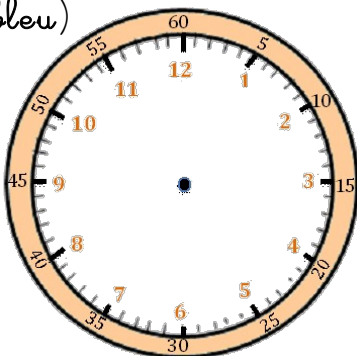
J'écris les heures indiquées sur ces horloges. Nous sommes le matin.



Il est ___ h et ___ min. Il est ___ h et ___ min. Il est ___ h et ___ min.

3

Je place les aiguilles selon les heures indiquées. (heures en rouge, minutes en bleu)



Il est 18 h 45 min.

Il est 14 h 25 min.

Il est 21 h 50 min.



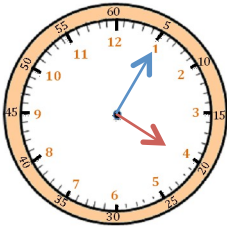
Mesures

Fiche 10

Les heures

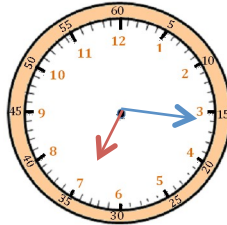
1

J'écris les heures du matin et de l'après-midi.



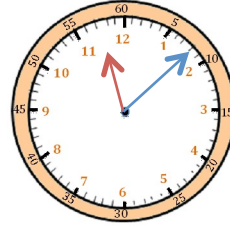
Il est __ h __ min.

Il est __ h __ min.



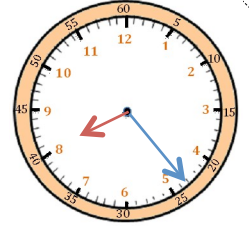
Il est __ h __ min.

Il est __ h __ min.



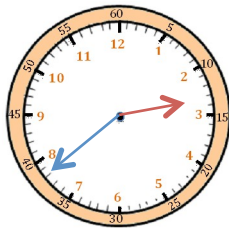
Il est __ h __ min.

Il est __ h __ min.



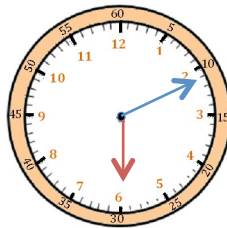
Il est __ h __ min.

Il est __ h __ min.



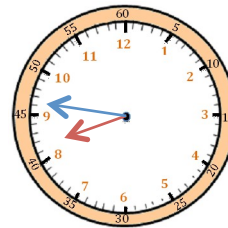
Il est __ h __ min.

Il est __ h __ min.



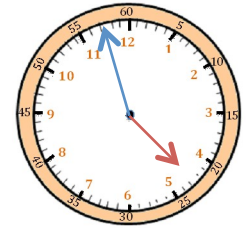
Il est __ h __ min.

Il est __ h __ min.



Il est __ h __ min.

Il est __ h __ min.



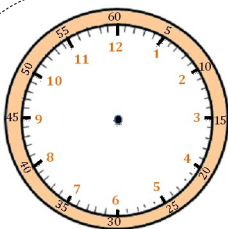
Il est __ h __ min.

Il est __ h __ min.

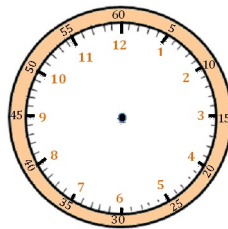


2

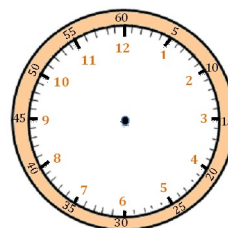
Je place les aiguilles selon les heures indiquées. (heures en rouge, minutes en bleu)



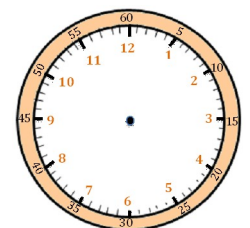
Il est 21 h 14 min.



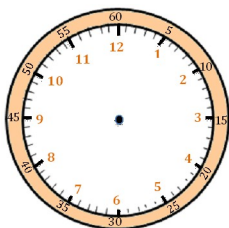
Il est 9 h 38 min.



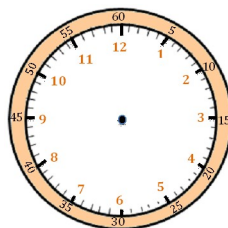
Il est 14 h 22 min.



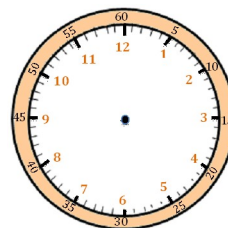
Il est 15 h 03 min.



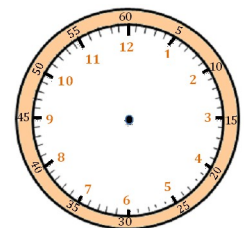
Il est 16 h 55 min.



Il est 23 h 35 min.



Il est minuit 20 min.



Il est 7 h 45 min.

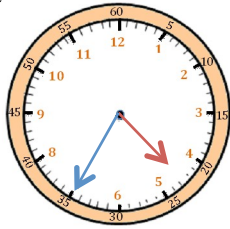


Mesures

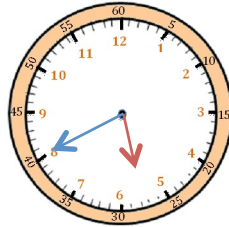
Les heures

1

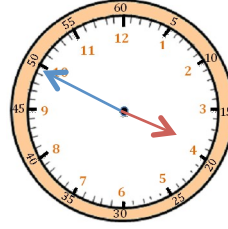
J'écris les heures et les minutes comme le modèle.



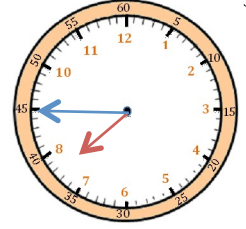
Il est 4 h 35 min ou
5 h moins vingt-cinq



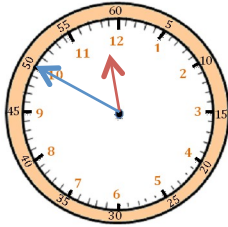
Il est ___ h ___ min
ou _____



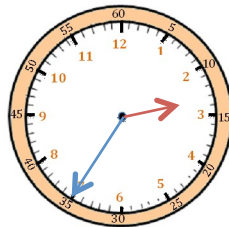
Il est ___ h ___ min
ou _____



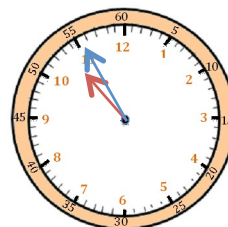
Il est ___ h ___ min
ou _____



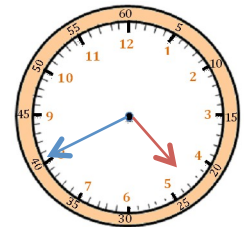
Il est ___ h ___ min
ou _____



Il est ___ h ___ min
ou _____



Il est ___ h ___ min
ou _____

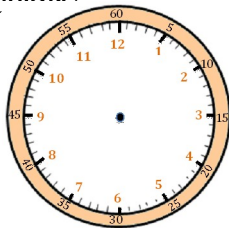


Il est ___ h ___ min
ou _____

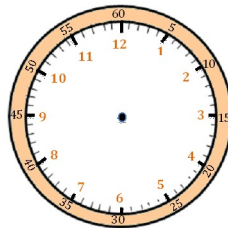


2

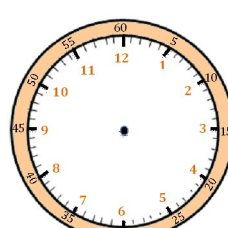
Je place les aiguilles selon les heures indiquées. (heures en rouge, minutes en bleu.)



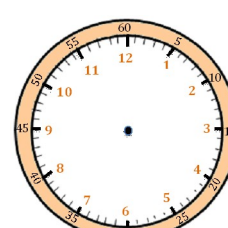
Il est 12 h 40 min.



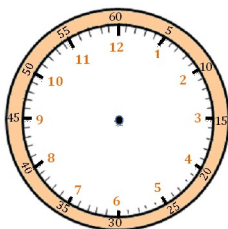
Il est 9 h moins vingt-cinq.



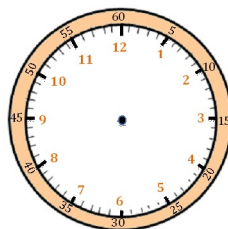
Il est 15 h 55 min.



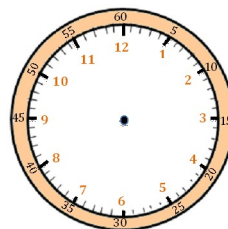
Il est 1 h moins le quart.



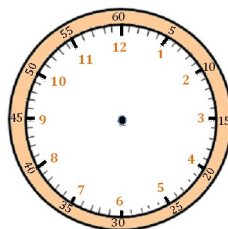
Il est 6 h moins dix.



Il est 21 h 35 min.



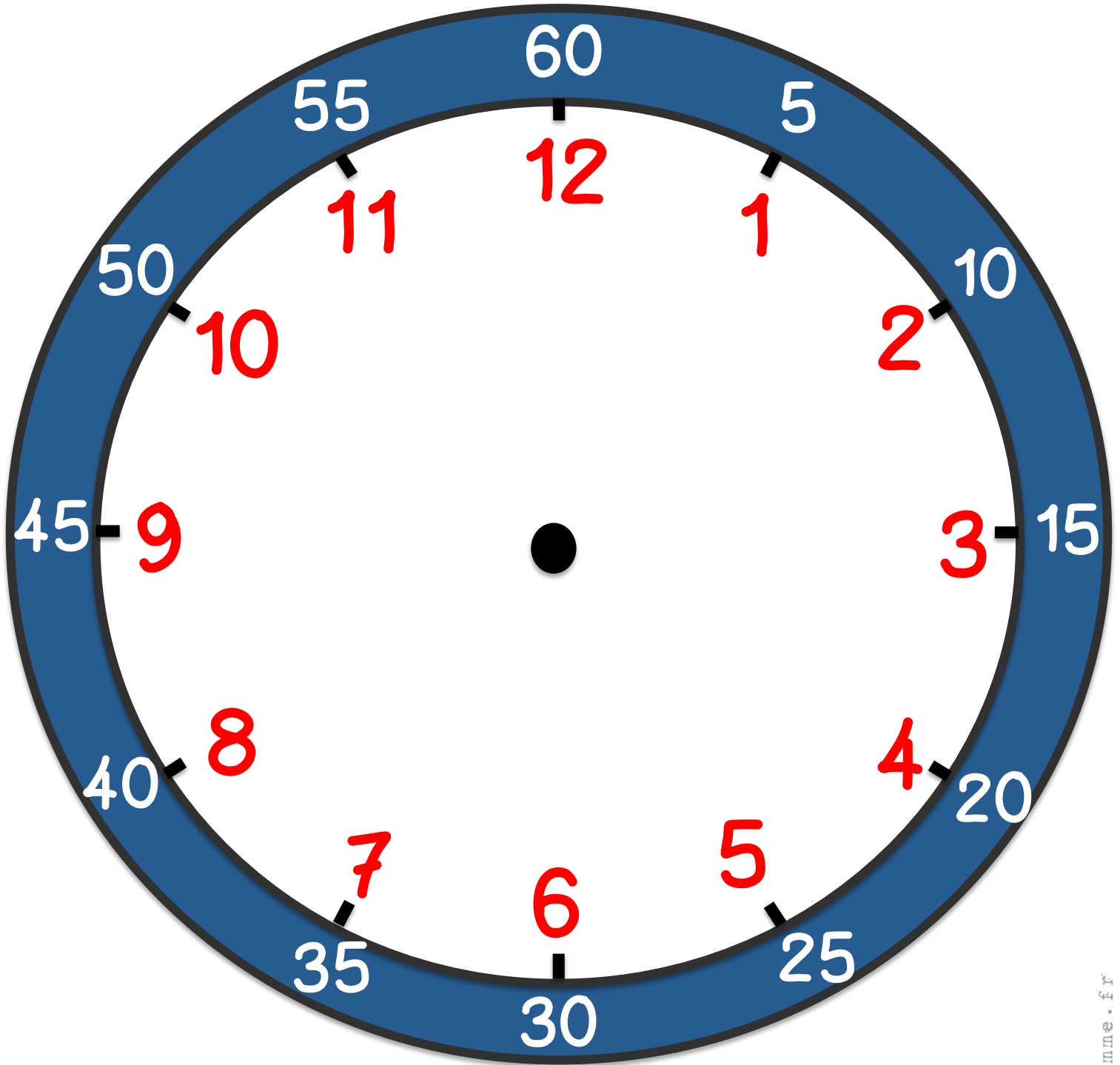
Il est midi moins cinq.



Il est 17 h 40 min.



L'heure



— : — —

