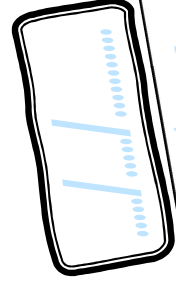



Meures

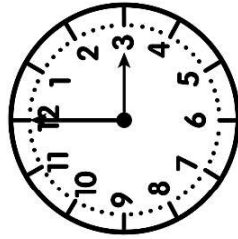


PRÉNOM

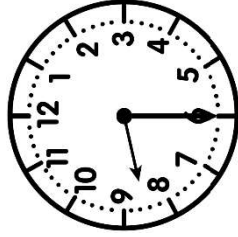
<https://laclassebleue.fr/>



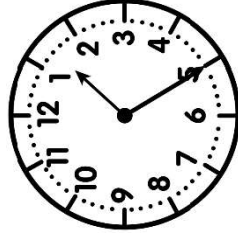
① Écris l'heure de la nuit/du matin sous chaque horloge.



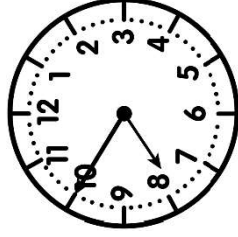
h



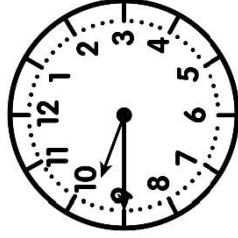
h



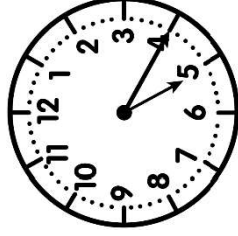
h



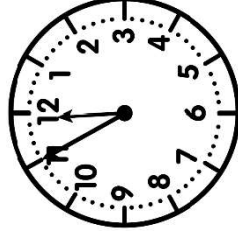
h




h



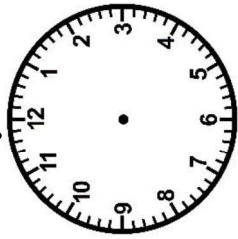
h



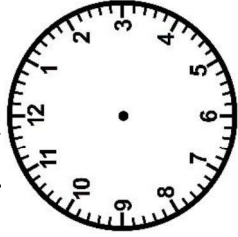
h



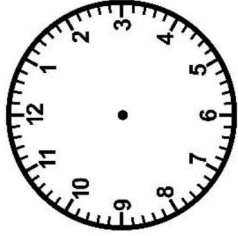
② Trace les aiguilles (rouge pour les heures, bleue pour les minutes).




6 h 30



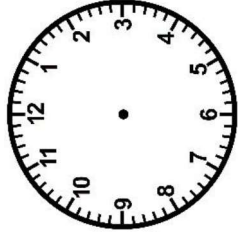
15 h 15




9 h 50




21 h 05



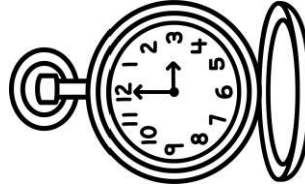
12 h 00



17 h 40



23 h 25



③ Complete ces égalités.

a) 7h 45 min + _____ = 8h
 b) 3h 20 min + _____ = 4h

c) 10h 55 min + _____ = 11h
 d) 16h 30 min + _____ = 17h
 e) 23h 15 min + _____ = 0h

f) 12h 10 min + _____ = 13h
 g) 21h 50 min + _____ = 22h
 h) 9h 40 min + _____ = 10h

Meures / lre / heure